



Division

Worksheet-3



SUCCESS IS A JOURNEY, NOT A DESTINATION.



1. There are eight legs. How many horses are there?



A. 3

B. 4

C. 2

D. 1

2. Latika has 25 stickers. She gives 5 to each of her student. Number of students who will get stickers is _____.


A. 4

B. 6

C. 3

D. 5

3. How many eggs must be transferred from basket A to basket B, so that the 2 baskets have the same number of eggs?



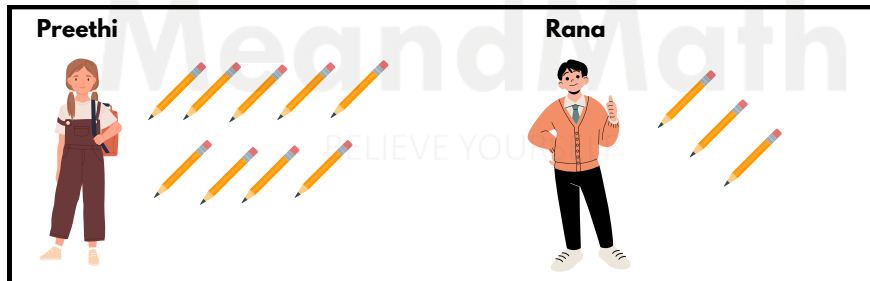
A. 5

B. 6

C. 3

D. 11

4. How many pencils should Preethi give Rana so that both of them will have the same number of pencils?



A. 4

B. 3

C. 6

D. 5

5. A loaf has 24 slices of bread. What is the number of slices you get when a loaf of bread is equally sliced 4 times?

A. 3

B. 4

C. 5

D. 6

6. The given bars and cones are divided into 6 equal groups.



How many are there in each group?


A. 6

B. 4

C. 3

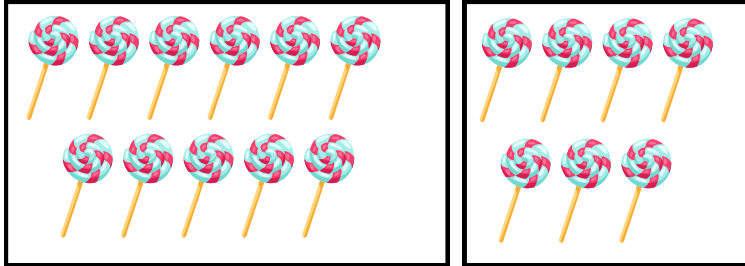
D. 5

7. How many Kittens would be there in each basket if the same number of Kittens are put into each basket?



- A. 3 B. 6 C. 4 D. 8
-

8. How many lollipops should Giri give Maya, so that both of them have the same number of lollipops?



- A. 7 B. 2 C. 11 D. 4
-

9. Find the missing number.

$$24 \div 6 = ?$$

- A. 8 B. 2 C. 5 D. 4
-

10. Find the missing number.

$$30 \div ? = 3$$

- A. 8 B. 10 C. 5 D. 6
-



TM

MeandMath
BELIEVE YOURSELF

BOOST YOUR MATH PERFORMANCE WITH MeandMath



Our Premium Batches are 1:1, 1:2, 1:3 and 1:6 & another batch is 1: many batches.



Clear Doubts, Master Concepts, Excel with Confidence.



Learn on Your Schedule with Our Class Recordings.



Stay Ahead, Stay Sharp: Conquer Daily Homework Hassle-Free



Level Up Weekly: Ace Assessments with Confidence and Ease

Join Our Live Classes

**Preparing for the
Math Olympiad?**

Book Now >

Register to MnM Olympiad

**Want to test your
International Math
Rank?**

Register Here >

Visit meandmath.com to learn more about us.



MeandMath
BELIEVE YOURSELF

A Roadmap to Brilliance

Our curriculum paves the way.

○ **Core** ○ **Advanced** ○ **Scholar**

Visit meandmath.com for further details on Curriculum.

*“There are many paths to
success in Math. We help all
students discover theirs.”*

**Are you stuck, not sure how
to solve math problem?**

**Want to Super Charge your
Math skills with our World Class
practice content!**

**Join our Homework
Help Group!**

[Join Now](#)



**Subscribe today to
get a resource to
unlock the World of
Wisdom!**

[Subscribe Here](#)



Visit meandmath.com to learn more about us.

Answer Key

1. C
2. D
3. C
4. B
5. D
6. C
7. B
8. B
9. D
10. B



MeandMath

BELIEVE YOURSELF

