



Subtraction

Worksheet-2



"Motivation is what gets you started. Habit is what keeps you going." —Jim Ryun

1 2 3 4

1. Mohit had 20 candies. He gave 10 candies to Samrath and ate 4 candies. How many candies are left with him now?



A. 6

B. 16

C. 8

D. 10

2. Trishika bought some laddus.



If she ate 10 laddus, then how many laddus are left?


A. 37

B. 27

C. 47

D. 22

3. Garima has some red and blue balloons. How many more red balloons than blue balloons did Garima have?



A. 27

B. 5

C. 3

D. 13

4. Amit has 27 buttons. He gave 12 of them to Varun. How many buttons are left with him?



A. 17

B. 12

C. 15

D. 18

5. Which of the following number sentence represents the given picture?



A. $14 - 3 = 11$

B. $14 - 3 = 10$

C. $14 - 11 = 4$

D. $14 - 10 = 4$

6. Which of the following shows the greatest number?


A. **86-73**

B. **98-87**

C. **35-21**


D. **54-42**

7. Mini had some hairclips as shown here. Eight of them got lost. How many hairclips were left with her?




- A. 14
- B. 10
- C. 16
- D. 12

8. Raj has  cars.

Mohit has  less cars than Raj. How many cars does Mohit has?

- A. 7
- B. 20
- C. 8
- D. 10

9. Riya has some flowers as shown here. She gives 2 pink flowers to Monu and 3 yellow flowers to Simi. How many yellow flowers are left with her?



- A. 4
- B. 6
- C. 10
- D. 15

10. Mohan has 40 sweets. He gives 10 sweets to Vinay and eats 15 sweets. How many sweets are left with him?

- A. 15
 - B. 25
 - C. 20
 - D. 10
-



TM

MeandMath
BELIEVE YOURSELF

BOOST YOUR MATH PERFORMANCE WITH MeandMath



Our Premium Batches are 1:1, 1:2, 1:3 and 1:6 & another batch is 1: many batches.



Clear Doubts, Master Concepts, Excel with Confidence.



Learn on Your Schedule with Our Class Recordings.



Stay Ahead, Stay Sharp: Conquer Daily Homework Hassle-Free



Level Up Weekly: Ace Assessments with Confidence and Ease

Join Our Live Classes

**Preparing for the
Math Olympiad?**

Book Now >

Register to MnM Olympiad

**Want to test your
International Math
Rank?**

Register Here >

Visit meandmath.com to learn more about us.



TM

MeandMath
BELIEVE YOURSELF

A Roadmap to Brilliance

Our curriculum paves the way.

○ **Core** ○ **Advanced** ○ **Scholar**

Visit meandmath.com for further details on Curriculum.

*“There are many
paths to success in
Math. We help all
students discover
theirs.”*

**Are you stuck, not sure how
to solve math problem?**

**Want to Super Charge your
Math skills with our World Class
practice content!**

**Join our Homework
Help Group!**

[Join Now](#)



**Subscribe today to
get a resource to
unlock the World of
Wisdom!**

[Subscribe Here](#)



Visit meandmath.com to learn more about us.

Answer Key

- 1. A
- 2. D
- 3. C
- 4. C
- 5. A
- 6. C
- 7. D
- 8. C
- 9. A
- 10. A



TM

MeandMath

BELIEVE YOURSELF

