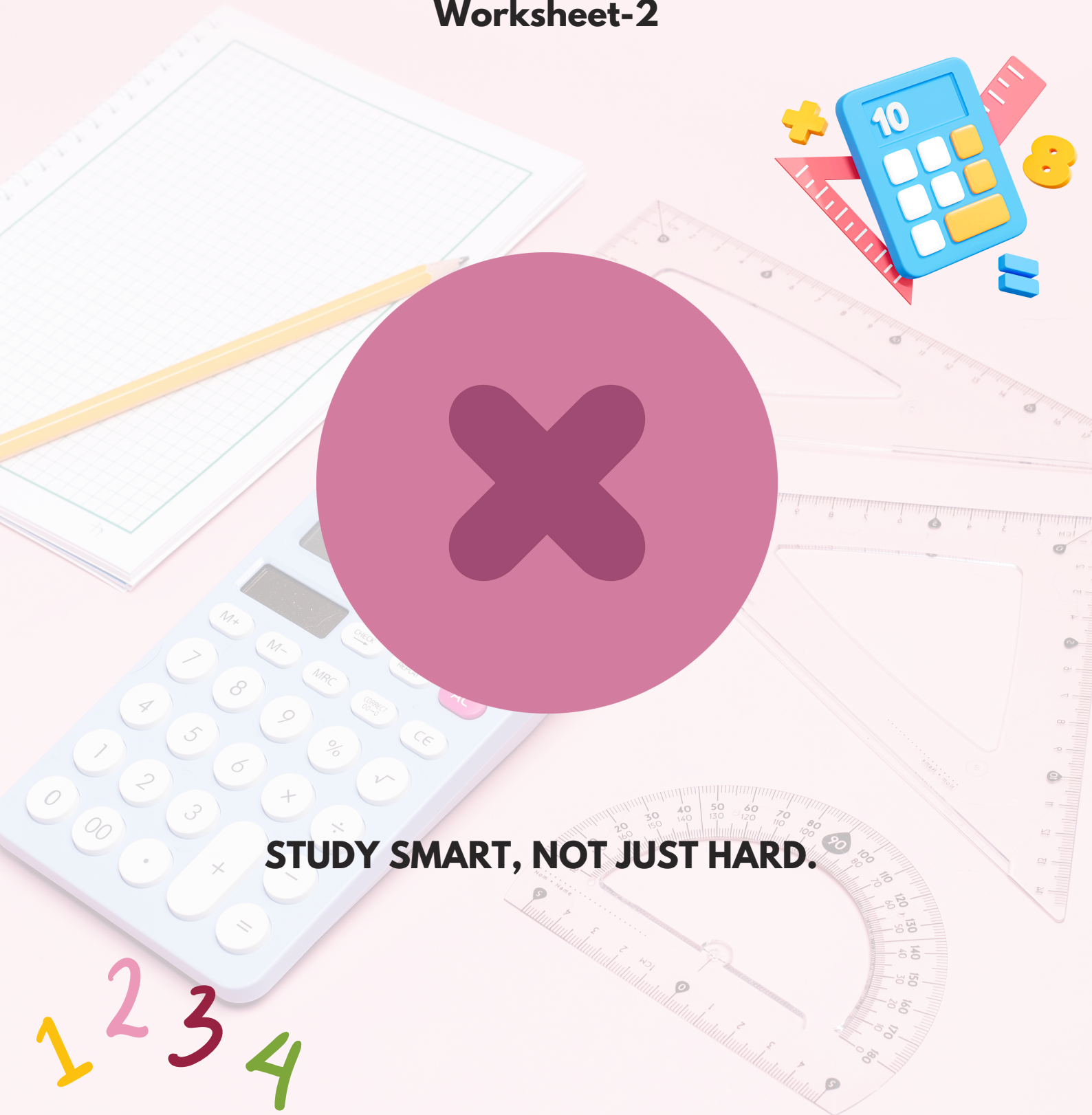








Multiplication

Worksheet-2



STUDY SMART, NOT JUST HARD.

1 2 3 4

1. The weight of Priya's  is equal to the weight of . The weight of  is equal to the weight of _____. .

- A. 10 B. 4 C. 5 D. 8
-

2. Soham has the given bucket of paint. Quantity of paint in 3 such buckets is _____ litres.


- A. 30
B. 45
C. 15
D. 40



3. The weight of Aastha's doll is equal to 10 marbles. What will be the weight of two such dolls?

- A. 5 marbles
B. 2 marbles
C. 20 marbles
D. 10 marbles
-

4. How many tentacles do the 5 octopuses have altogether?




- A. 40 B. 24 C. 28 D. 36
-

5. Mrs. Smith bought 5 pairs of slippers. How many slippers were there altogether?

- A. 5 B. 10 C. 7 D. 20
-


6. Which of the following does not represent the picture?







- A. 2 times 5
B. 2×5
C. $5 + 5$
D. $2 + 5$
-

7. There are 2 ladybugs and 3 spiders in a garden. How many legs are there altogether?

- A. 40
- B. 36
- C. 58
- D. 38




8. If Manisha eats    each day, then how many  does she eat in 9 days?

- A. 27
- B. 28
- C. 18
- D. 21

9. A cow has 4 legs. 5 such cows will have _____ legs.

- A. 20
- B. 15
- C. 25
- D. 18



10. Find the missing number.

$$4 \times \square = 16$$

- A. 5
 - B. 6
 - C. 4
 - D. 9
-



MeandMath
BELIEVE YOURSELF

BOOST YOUR MATH PERFORMANCE WITH MeandMath



Our Premium Batches are 1:1, 1:2, 1:3 and 1:6 & another batch is 1: many batches.



Clear Doubts, Master Concepts, Excel with Confidence.



Learn on Your Schedule with Our Class Recordings.



Stay Ahead, Stay Sharp: Conquer Daily Homework Hassle-Free



Level Up Weekly: Ace Assessments with Confidence and Ease

Join Our Live Classes

**Preparing for the
Math Olympiad?**

Book Now >

Register to MnM Olympiad

**Want to test your
International Math
Rank?**

Register Here >

Visit meandmath.com to learn more about us.



MeandMath
BELIEVE YOURSELF

A Roadmap to Brilliance

Our curriculum paves the way.

○ **Core** ○ **Advanced** ○ **Scholar**

Visit meandmath.com for further details on Curriculum.

“There are many paths to success in Math. We help all students discover theirs.”

Are you stuck, not sure how to solve math problem?

Want to Super Charge your Math skills with our World Class practice content!

Join our Homework Help Group!

[Join Now](#)



Subscribe today to get a resource to unlock the World of Wisdom!

[Subscribe Here](#)



Visit meandmath.com to learn more about us.

Answer Key

1. D
2. B
3. C
4. A
5. B
6. D
7. B
8. A
9. A
10. C



TM

MeandMath

BELIEVE YOURSELF

